

Lecture 4 : General Logarithms and Exponentials.

For $a > 0$ and x any real number, we define

$$a^x = e^{x \ln a}, \quad a > 0.$$

The function a^x is called the exponential function with base a .

Note that $\ln(a^x) = x \ln a$ is true for all real numbers x and all $a > 0$. (We saw this before for x a rational number).

Note: We have no definition for a^x when $a < 0$, when x is irrational.

For example $2^{\sqrt{2}} = e^{\sqrt{2} \ln 2}$, $2^{-\sqrt{2}}$, $(-2)^{\sqrt{2}}$ (no definition).

Algebraic rules

The following **Laws of Exponent** follow from the laws of exponents for the natural exponential function.

$$a^{x+y} = a^x a^y \quad a^{x-y} = \frac{a^x}{a^y} \quad (a^x)^y = a^{xy} \quad (ab)^x = a^x b^x$$

Proof $a^{x+y} = e^{(x+y) \ln a} = e^{x \ln a + y \ln a} = e^{x \ln a} e^{y \ln a} = a^x a^y$. etc...

Example Simplify $\frac{(a^x)^2 a^{x^2+1}}{a^2}$.

Differentiation

The following **differentiation rules** also follow from the rules of differentiation for the natural exponential.

$$\frac{d}{dx}(a^x) = \frac{d}{dx}(e^{x \ln a}) = a^x \ln a \quad \frac{d}{dx}(a^{g(x)}) = \frac{d}{dx} e^{g(x) \ln a} = g'(x) a^{g(x)} \ln a$$

Example Differentiate the following function:

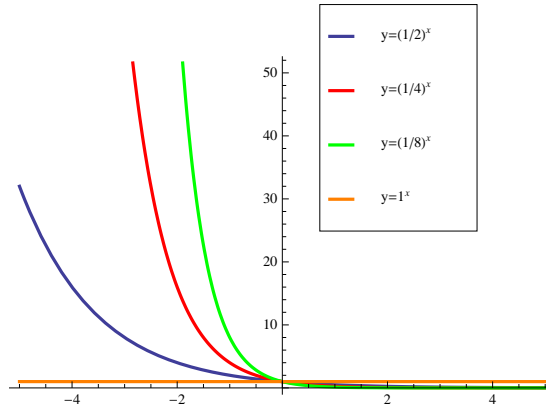
$$f(x) = (1000)2^{x^2+1}.$$

Graphs of Exponential functions. Case 1: $0 < a < 1$

- y-intercept: The y-intercept is given by $y = a^0 = e^{0 \ln a} = e^0 = 1$.
- x-intercept: The values of $a^x = e^{x \ln a}$ are always positive and there is no x intercept.

- Slope: If $0 < a < 1$, the graph of $y = a^x$ has a negative slope and is always decreasing, $\frac{d}{dx}(a^x) = a^x \ln a < 0$. In this case a smaller value of a gives a steeper curve.
- The graph is concave up since the second derivative is $\frac{d^2}{dx^2}(a^x) = a^x(\ln a)^2 > 0$.
- As $x \rightarrow \infty$, $x \ln a$ approaches $-\infty$, since $\ln a < 0$ and therefore $a^x = e^{x \ln a} \rightarrow 0$.
- As $x \rightarrow -\infty$, $x \ln a$ approaches ∞ , since both x and $\ln a$ are less than 0. Therefore $a^x = e^{x \ln a} \rightarrow \infty$.

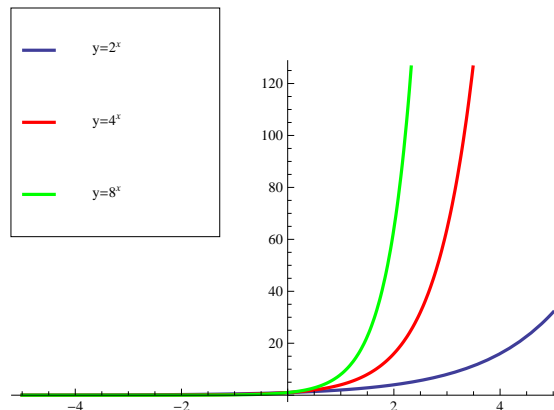
For $0 < a < 1$, $\lim_{x \rightarrow \infty} a^x = 0$, $\lim_{x \rightarrow -\infty} a^x = \infty$.



Graphs of Exponential functions. Case 2: $a > 1$

- y-intercept: The y-intercept is given by $y = a^0 = e^{0 \ln a} = e^0 = 1$.
- x-intercept: The values of $a^x = e^{x \ln a}$ are always positive and there is no x intercept.
- If $a > 1$, the graph of $y = a^x$ has a positive slope and is always increasing, $\frac{d}{dx}(a^x) = a^x \ln a > 0$.
- The graph is concave up since the second derivative is $\frac{d^2}{dx^2}(a^x) = a^x(\ln a)^2 > 0$.
- In this case a larger value of a gives a steeper curve.
- As $x \rightarrow \infty$, $x \ln a$ approaches ∞ , since $\ln a > 0$ and therefore $a^x = e^{x \ln a} \rightarrow \infty$
- As $x \rightarrow -\infty$, $x \ln a$ approaches $-\infty$, since $x < 0$ and $\ln a > 0$. Therefore $a^x = e^{x \ln a} \rightarrow 0$.

For $a > 1$, $\lim_{x \rightarrow \infty} a^x = \infty$, $\lim_{x \rightarrow -\infty} a^x = 0$.



Functions of the form $(f(x))^{g(x)}$.

Derivatives We now have 4 different types of functions involving bases and powers. So far we have dealt with the first three types:

If a and b are constants and $g(x) > 0$ and $f(x)$ and $g(x)$ are both differentiable functions.

$$\boxed{\frac{d}{dx}a^b = 0, \quad \frac{d}{dx}(f(x))^b = b(f(x))^{b-1}f'(x), \quad \frac{d}{dx}a^{g(x)} = g'(x)a^{g(x)} \ln a, \quad \frac{d}{dx}(f(x))^{g(x)}$$

For $\frac{d}{dx}(f(x))^{g(x)}$, we use **logarithmic differentiation** or write the function as $(f(x))^{g(x)} = e^{g(x)\ln(f(x))}$ and use the chain rule.

Example Differentiate x^{2x^2} , $x > 0$.

Limits

To calculate limits of functions of this type it may help write the function as $(f(x))^{g(x)} = e^{g(x)\ln(f(x))}$.

Example What is $\lim_{x \rightarrow \infty} x^{-x}$

General Logarithmic functions

Since $f(x) = a^x$ is a monotonic function whenever $a \neq 1$, it has an inverse which we denote by $f^{-1}(x) = \log_a x$. We get the following from the properties of inverse functions:

$$f^{-1}(x) = y \quad \text{if and only if} \quad f(y) = x$$

$$\boxed{\log_a(x) = y \quad \text{if and only if} \quad a^y = x}$$

$$f(f^{-1}(x)) = x \quad f^{-1}(f(x)) = x$$

$$\boxed{a^{\log_a(x)} = x \quad \log_a(a^x) = x.}$$

Converting to the natural logarithm

It is not difficult to show that $\log_a x$ has similar properties to $\ln x = \log_e x$. This follows from the **Change of Base Formula** which shows that The function $\log_a x$ is a constant multiple of $\ln x$.

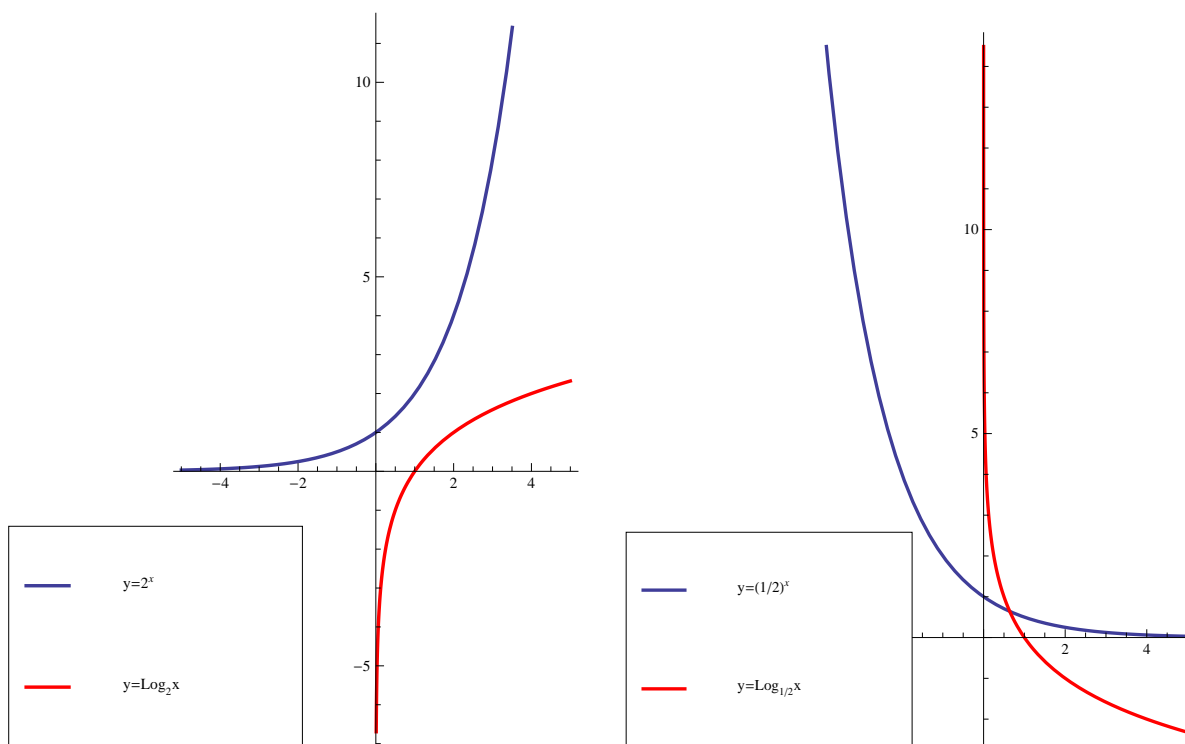
$$\log_a x = \frac{\ln x}{\ln a}$$

The algebraic properties of the natural logarithm thus extend to general logarithms, by the change of base formula.

$$\log_a 1 = 0, \quad \log_a(xy) = \log_a(x) + \log_a(y), \quad \log_a(x^r) = r \log_a(x).$$

for any positive number $a \neq 1$. In fact for most calculations (especially limits, derivatives and integrals) it is advisable to convert $\log_a x$ to natural logarithms. The most commonly used logarithm functions are $\log_{10} x$ and $\ln x = \log_e x$.

Since $\log_a x$ is the inverse function of a^x , it is easy to derive the properties of its graph from the graph $y = a^x$, or alternatively, from the change of base formula $\log_a x = \frac{\ln x}{\ln a}$.



Basic Application

Example Express as a single number $\log_5 25 - \log_5 \sqrt{5}$

Using the change of base formula for Derivatives

From the above change of base formula for $\log_a x$, we can easily derive the following **differentiation formulas**:

$$\boxed{\frac{d}{dx}(\log_a x) = \frac{1}{x \ln a} \quad \frac{d}{dx}(\log_a g(x)) = \frac{g'(x)}{g(x) \ln a}.$$

Example Find $\frac{d}{dx} \log_2(x \sin x)$.

A special limit and an approximation of e

We derive the following limit formula by taking the derivative of $f(x) = \ln x$ at $x = 1$:

$$\lim_{x \rightarrow 0} \frac{\ln(1+x)}{x} = \lim_{x \rightarrow 0} \ln(1+x)^{1/x} = 1.$$

Applying the (continuous) exponential function to the limit we get

$$\boxed{e = \lim_{x \rightarrow 0} (1+x)^{1/x}}$$

Note If we substitute $y = 1/x$ in the above limit we get

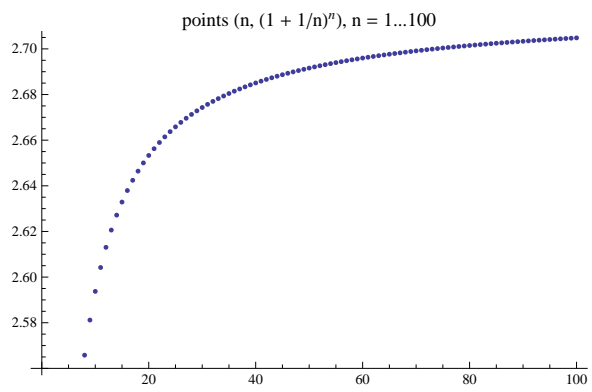
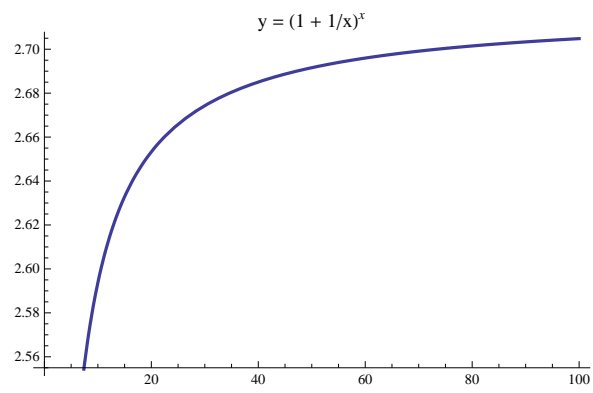
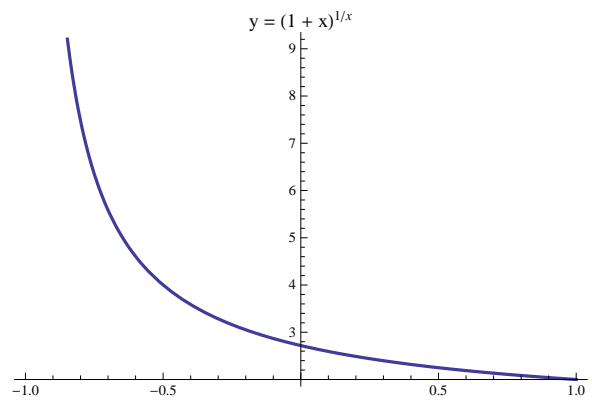
$$\boxed{e = \lim_{y \rightarrow \infty} \left(1 + \frac{1}{y}\right)^y \quad \text{and} \quad e = \lim_{n \rightarrow \infty} \left(1 + \frac{1}{n}\right)^n}$$

where n is an integer (see graphs below). We look at large values of n below to get an approximation of the value of e .

$$n = 10 \rightarrow \left(1 + \frac{1}{n}\right)^n = 2.59374246, \quad n = 100 \rightarrow \left(1 + \frac{1}{n}\right)^n = 2.70481383,$$

$$n = 100 \rightarrow \left(1 + \frac{1}{n}\right)^n = 2.71692393, \quad n = 1000 \rightarrow \left(1 + \frac{1}{n}\right)^n = 2.1814593.$$

Example Find $\lim_{x \rightarrow 0} \left(1 + \frac{x}{2}\right)^{1/x}$.



Extras for discussion at your Friday night Calculus Party

Example Differentiate the following functions:

$$f(x) = 102^x \quad g(x) = (1000)2^{x^3}, \quad x^2 + 3^{\sqrt{x}}, \quad (x^2 + 3)^{\sqrt{x}}.$$

Example Evaluate the following limits:

$$\lim_{x \rightarrow 0} 2^{x^2}, \quad \lim_{x \rightarrow 0} (1/2)^{x^2} \quad \lim_{x \rightarrow \infty} (x^2 + (1/3)^{\sqrt{x}}), \quad \lim_{x \rightarrow 0} (1+x)^{1/x}, \quad \lim_{x \rightarrow 0} (1 + \frac{x}{5})^{1/x}$$

Use the change of base formula for the next 3 problems

Example Solve for x if $50 = 2^{x-1}$

Example Evaluate the limit $\lim_{x \rightarrow 0} \log_{1/3}(x^2 + x)$.

Example Evaluate the integral $\int \frac{1}{x \log_2 x} dx$.

$$\lim_{x \rightarrow 0} \ln(1+x)^{1/x} = 1.$$

Richter Scale: The Richter scale gives the magnitude of an earthquake to be

$$\log_{10}(I/S)$$

where S = intensity of a standard quake giving an amplitude of 1 micron = 10^{-4} cm on a seismograph 100 km from the epicenter. I = intensity of the earthquake in question measured on a seismograph 100 km from the epicenter (or an estimate thereof from a model).

If a quake has intensity $I = 1$ (cm on seismograph 100 km from epicenter) what is its magnitude?
If a quake has intensity $I = 10$ (cm on seismograph 100 km from epicenter) what is its magnitude?
Note that a magnitude 5 quake has an intensity 10 times that of a 4 quake etc....
Chile, 1960, 9.5, Alaska, 1964, 9.2, 2004, Sumatra Indonesia, 9.1. , Had a 3 in Indiana recently ?

Solutions to Extras

proof that $\lim_{x \rightarrow 0} (1+x)^{1/x} = e$:

Let $f(x) = \ln x$, then

$$f'(1) = \lim_{h \rightarrow 0} \frac{\ln(1+h) - \ln 1}{h} = \lim_{h \rightarrow 0} \frac{\ln(1+h)}{h} = \lim_{h \rightarrow 0} \ln(1+h)^{1/h}.$$

Now $f'(x) = 1/x$, therefore $f'(1) = 1$ and

$$\lim_{h \rightarrow 0} \ln(1+h)^{1/h} = 1.$$

Applying the exponential (which is a continuous function) to both sides, we get

$$e^{\lim_{h \rightarrow 0} \ln(1+h)^{1/h}} = \lim_{h \rightarrow 0} e^{\ln(1+h)^{1/h}} = \lim_{h \rightarrow 0} (1+h)^h = e^1 = e$$

Example Differentiate the following functions:

$$f(x) = 102^x \quad g(x) = (1000)2^{x^3}, \quad h(x) = x^2 + 3^{\sqrt{x}}, \quad k(x) = (x^2 + 3)^{\sqrt{x}}.$$

$$f(x) = 10e^{x \ln 2}, \quad \text{using chain rule: } f'(x) = 10e^{x \ln 2} \ln 2 = 10(\ln 2)2^x.$$

$$g(x) = (1000)e^{x^3 \ln 2}, \quad \text{using chain rule: } g'(x) = 1000e^{x^3 \ln 2} 3x^2 \ln 2 = 3000x^2(\ln 2)2^{x^3}.$$

$$h(x) = x^2 + e^{\sqrt{x} \ln 3}, \quad \text{using chain rule: } h'(x) = 2x + e^{\sqrt{x} \ln 3} \frac{1}{2\sqrt{x}} \ln 3 = 2x + \frac{\ln 3}{2\sqrt{x}} 3^{\sqrt{x}}.$$

For $y = k(x)$, we can use logarithmic differentiation.

$$y = (x^2 + 3)^{\sqrt{x}} \quad \rightarrow \quad \ln y = \sqrt{x} \ln(x^2 + 3).$$

Differentiating both sides we get

$$\frac{1}{y} \frac{dy}{dx} = \frac{1}{2\sqrt{x}} \ln(x^2 + 3) + \sqrt{x} \frac{2x}{x^2 + 3}$$

Multiplying both sides by $y = (x^2 + 3)^{\sqrt{x}}$, we get

$$\frac{dy}{dx} = \frac{(x^2 + 3)^{\sqrt{x}}}{2\sqrt{x}} \ln(x^2 + 3) + \frac{2x^{3/2}(x^2 + 3)^{\sqrt{x}}}{x^2 + 3}$$

Example Evaluate the following limits:

$$\lim_{x \rightarrow 0} 2^{x^2}, \quad \lim_{x \rightarrow 0} \log_2(x^2) \quad \lim_{x \rightarrow \infty} (x^2 + (1/3)^{\sqrt{x}}), \quad \lim_{x \rightarrow 0} (1 + \frac{x}{5})^{1/x}$$

$$\lim_{x \rightarrow 0} 2^{x^2} = 2^{\lim_{x \rightarrow 0} (x^2)} = 2^0 = 1.$$

$$\lim_{x \rightarrow 0} \log_2(x^2) = \lim_{x \rightarrow 0} \frac{\ln(x^2)}{\ln 2} = \frac{\lim_{x \rightarrow 0} \ln(x^2)}{\ln 2} = -\infty \quad \text{since } \ln 2 > 0.$$

$$\lim_{x \rightarrow \infty} (x^2 + (1/3)^{\sqrt{x}}) = \lim_{x \rightarrow \infty} x^2 + \lim_{x \rightarrow \infty} (e)^{\sqrt{x} \ln(1/3)} = \lim_{x \rightarrow \infty} x^2 + \lim_{x \rightarrow \infty} (e)^{-\sqrt{x} \ln(3)}.$$

As $x \rightarrow \infty$, we have $-\sqrt{x} \ln 3 \rightarrow -\infty$ and $\lim_{x \rightarrow \infty} (e)^{-\sqrt{x} \ln 3} = 0$. Therefore

$$\lim_{x \rightarrow \infty} (x^2 + (1/3)^{\sqrt{x}}) = \lim_{x \rightarrow \infty} x^2 = \infty.$$

$$\lim_{x \rightarrow 0} (1 + \frac{x}{5})^{1/x} = \lim_{y \rightarrow 0} (1 + y)^{1/(5y)} = \left[\lim_{y \rightarrow 0} (1 + y)^{1/(y)} \right]^{1/5} = e^{1/5}, \quad \text{where } y = \frac{x}{5}.$$

Example Solve for x if $50 = 2^{x-1}$

We could apply \log_2 to both sides of this equation to get

$$\log_2(50) = \log_2(2^{x-1}) = x - 1.$$

Solving for x , we get $x = \log_2(50) + 1$.

As an alternative option, we could apply \ln to both sides of the equation $50 = 2^{x-1}$, to get

$$\ln(50) = \ln(2^{x-1}) = (x - 1) \ln 2.$$

Solving for x , we get $x = \frac{\ln(50)}{\ln(2)} + 1$. This is of course the same answer as before.

Example Evaluate the integral $\int \frac{1}{x \log_2 x} dx$.

We use the change of base formula to get

$$\int \frac{1}{x \log_2 x} dx = \int \frac{\ln(2)}{x \ln(x)} dx = \ln(2) \int \frac{1}{x \ln(x)} dx.$$

Let $u = \ln(x)$, then $du = \frac{1}{x} dx$. We get

$$\ln(2) \int \frac{1}{x \ln(x)} dx = \ln(2) \int \frac{1}{u} du = \ln(2) \ln(u) + C = \ln(2) \ln(\ln(x)) + C.$$

Richter Scale: The Richter scale gives the magnitude of an earthquake to be

$$\log_{10}(I/S)$$

where S =intensity of a standard quake giving an amplitude of 1 micron = 10^{-4} cm on a seismograph 100 km from the epicenter. I = intensity of the earthquake in question measured on a seismograph 100 km from the epicenter (or an estimate thereof from a model).

If a quake has intensity $I = 1$ (cm on seismograph 100 km from epicenter) what is its magnitude?

If a quake has intensity $I = 10$ (cm on seismograph 100 km from epicenter) what is its magnitude?

Note that a magnitude 5 quake has an intensity 10 times that of a 4 quake etc....

Chile, 1960, 9.5, Alaska, 1964, 9.2, 2004, Sumatra Indonesia, 9.1. , Had a 3 in Indiana recently ?